



RANGERS  
CHARITY  
FOUNDATION

# ACTIVITY WORKSHEETS

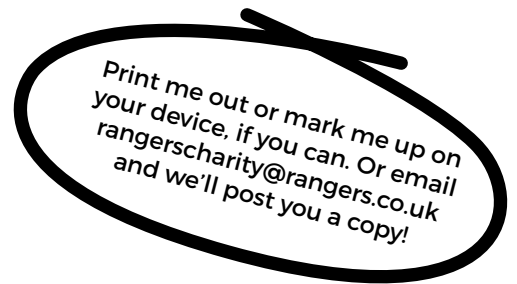
WEEK 10



The Rangers Charity Foundation is delighted to bring you weekly workbooks, bursting with activities to help keep children's minds active in a fun way, whilst we are all staying at home and staying safe.

# 1. Wordsearch

Can you work out the Rangers player from his previous clubs, and find them in the grid below?



A	K	T	A	R	F	I	E	L	D	R	B	W	I	W
Y	P	C	T	C	A	N	P	E	E	N	L	O	K	V
K	I	R	I	P	R	P	F	D	P	R	A	B	F	V
A	E	I	C	F	E	O	N	B	Z	P	Z	W	V	L
M	N	A	Z	P	E	A	I	S	P	O	B	Z	E	T
A	N	B	M	W	L	P	D	Q	J	O	Y	J	W	D
R	L	R	C	E	H	S	X	O	W	F	P	C	Q	Y
A	N	Z	H	E	D	Z	Y	L	X	E	I	G	A	H
W	J	O	F	E	T	U	U	G	B	J	E	U	O	M
H	Q	A	H	K	A	X	X	D	O	A	L	Q	W	I
H	D	P	S	P	E	B	X	V	O	L	Y	K	V	D
R	B	W	K	Z	F	F	W	E	W	T	D	F	L	H
Z	H	J	P	E	L	S	D	Y	J	S	G	S	T	U
C	H	B	S	Z	Y	L	U	L	S	Z	Z	T	O	P
C	I	P	H	L	J	U	H	D	Z	L	V	E	S	N

## PLAYER 1

FALKIRK  
BURNLEY  
HUDDERSFIELD

## PLAYER 2

TORONTO FC  
SUNDERLAND  
AFC BOURNEMOUTH

## PLAYER 3

SHREWSBURY  
CHELTENHAM TOWN (LOAN)  
BRIGHTON AND HOVE ALBION

## PLAYER 4

FIORENTINA  
FC VIITORUL CONSTANTA  
GENK

## PLAYER 5

MALMO  
VERONA  
BOLOGNA

## PLAYER 6

SOUTHEND UNITED (LOAN)  
COLCHESTER UNITED (LOAN)  
DUNDEE

# 2. Speak their language

Jean-Claude Darcheville scored 16 goals for Rangers – can you work out what he’s saying below? Remember, Jean-Claude speaks French!

- The colours in Rangers home strip are ‘rouge, blanc et bleu’.

\_\_\_\_\_.

- A Manager might send on ‘un remplaçant’ if a player is injured.

\_\_\_\_\_.

- Rangers have won 54 ‘titres de ligue’


\_\_\_\_\_.

- The ‘arbiter’ has blown his whistle to end the match.

\_\_\_\_\_.

# 3. Crossword

Can you complete our crossword by filling in which country these Rangers players have represented?



## Across

- 2. Borna Barisic
- 3. Filip Helander
- 5. Ryan Jack
- 8. Steven Davis
- 9. Ianis Hagi
- 10. Glen Kamara

## Down

- 1. Matt Polster
- 2. Scott Arfield
- 4. Alfredo Morelos
- 6. Joe Aribo
- 7. Jermaine Defoe

# 4. Europa League challenge


Can you tackle this maths challenge using the Europa League Group Stage Table?

<b>GROUP G</b>	Played	Won	Drawn	Lost	For	Against	Goal difference	Points
<b>Porto</b>	6	3	1	2	8	9	-1	10
<b>Rangers FC</b>	6	2	3	1	8	6	2	9
<b>BSC Young Boys</b>	6	2	?	2	8	7	1	8
<b>Feyenoord</b>	6	1	2	?	7	9	-2	5

1. How many goals were scored in the Group Stage? \_\_\_\_\_
2. Alfredo Morelos scored 6 goals in the group stage for Rangers, how many were scored by other players? \_\_\_\_\_  
Can you remember who these players were? \_\_\_\_\_
3. How many points did Porto drop? \_\_\_\_\_
4. What is half the total points earned in the group? \_\_\_\_\_
5. Which team drew 50% of their games? \_\_\_\_\_
6. If Porto won the games they lost, what would their points total be? \_\_\_\_\_
7. How many games did Feyenoord lose? \_\_\_\_\_
8. Which team averaged a point and a half per game? \_\_\_\_\_
9. What is the maximum amount of points a team could get in the group stage?  
\_\_\_\_\_
10. What is the difference between the top 2 teams' points total combined with that of the bottom 2 teams' points total combined? \_\_\_\_\_

# 5. Design your own Rangers edition of PES 2021!

Can you use the rectangle below to design the front cover of your very own Rangers FC edition of Pro Evolution Soccer? What players will you choose? What console will you play it on?



Completed by \_\_\_\_\_ age \_\_\_\_\_

We'd love to see your completed worksheets, or images of the family enjoying them! If you'd like, you can share these on social media tagging @RFC\_Charity and using #AFoundationFromHome.